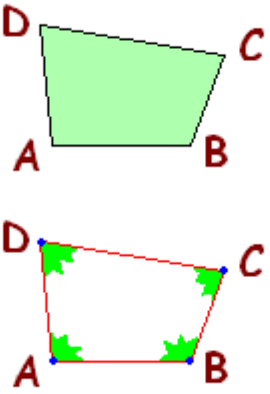
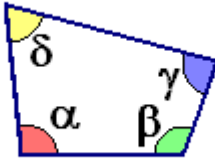
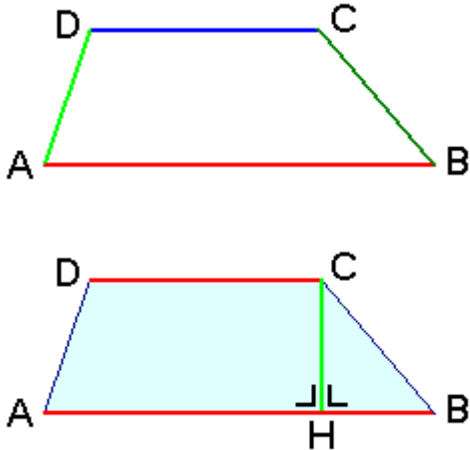
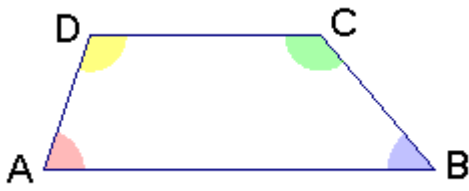
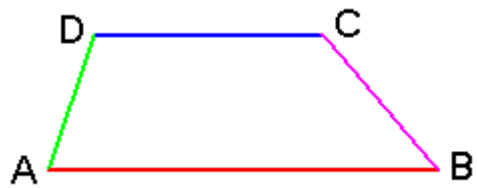



QUADRILATERI

	<p>QUADRILATERO ABCD</p> <p>LATI: AB, BC, CD, DA</p> <p>VERTICI: A, B, C, D</p> <p>ANGOLI \hat{A}, \hat{B}, \hat{C}, \hat{D}</p>
	$\alpha + \beta + \gamma + \delta = 360^\circ$
	<p>TRAPEZIO ABCD</p> <p>$AB \parallel DC$</p> <p>AB = BASE MAGGIORE</p> <p>DC = BASE MINORE</p> <p>CB, AD = LATI OBLIQUI</p> <p>CH = ALTEZZA</p>
	$\hat{A} + \hat{D} = 180^\circ$ $\hat{B} + \hat{C} = 180^\circ$



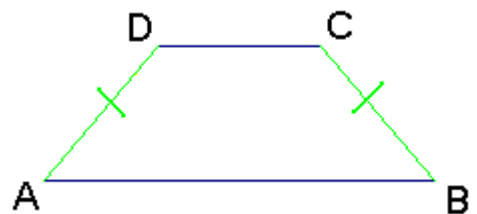
TRAPEZIO SCALENO

$$AD \neq BC$$



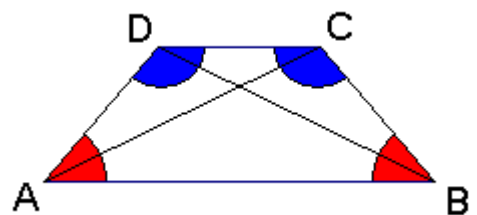
TRAPEZIO RETTANGOLO

$$\hat{A} = \hat{D} = 90^\circ$$




TRAPEZIO ISOSCELE

$$AD = BC$$



$$\hat{A} = \hat{B} \quad \hat{D} = \hat{C}$$

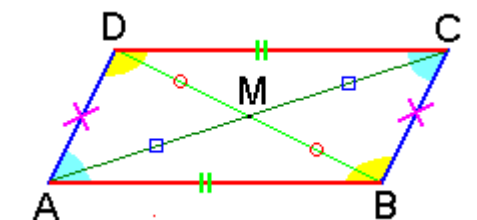
$$AC = BD$$



PARALLELOGRAMMA ABCD

$$AB \parallel CD$$

$$AD \parallel BC$$



$$AB = CD$$


$$AD = BC$$

$$\hat{A} = \hat{C}$$

$$\hat{D} = \hat{B}$$

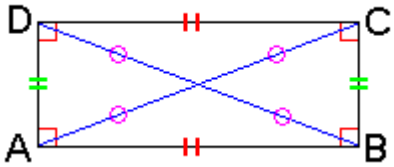
$$AM = MC$$

$$DM = MB$$

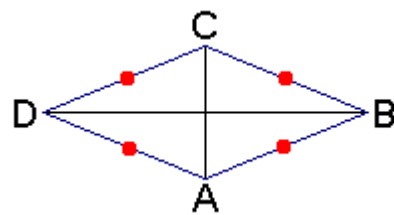


RETTANGOLO ABCD

$$\hat{A} = \hat{B} = \hat{C} = \hat{D} = 90^\circ$$

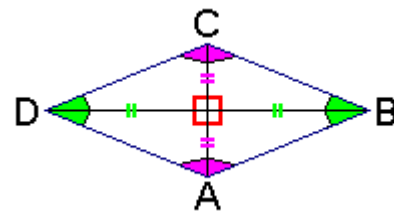


$$AC = BD$$

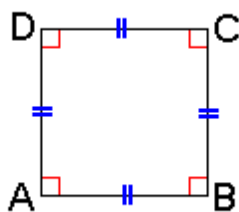


ROMBO ABCD

$$AB = BC = CD = DA$$



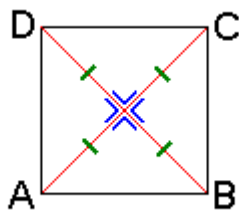
$$DB \perp CA$$



QUADRATO ABCD

$$\hat{A} = \hat{B} = \hat{C} = \hat{D} = 90^\circ$$

$$AB = BC = CD = DA$$



$$AC = BD$$

$$DB \perp CA$$